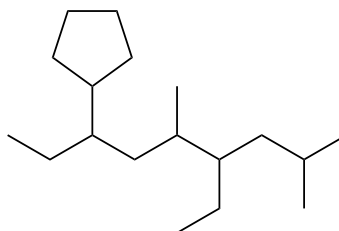
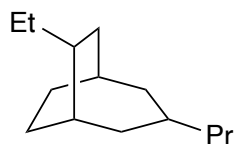
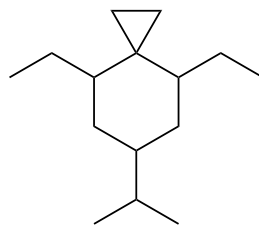
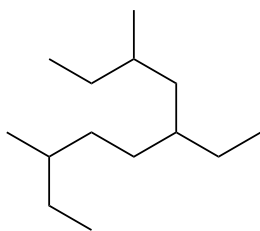


## Quiz 2: Classification, Representation & Nomenclature

total score: 16 pts

1. Provide a systematic name for the following compounds:



(8 pts)

2. Draw a skeletal formula for each of the following compounds:

(a) 1,2,4,5-tetraethylcyclohexane

(b) 3-(*tert*-butyl)-2,2,4,4-tetramethylpentane

(c) 1,4-dimethylspiro[2.2]pentane

(d) 6-methylbicyclo[3.1.0]hexane

(8 pts)